

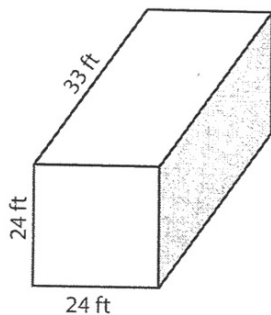
Name: \_\_\_\_\_

H.W 7.2

**Volume of Prism**

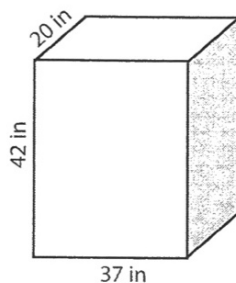
Find the volume of each prism. ( use  $\pi = 3.14$  )

1)



Volume = \_\_\_\_\_

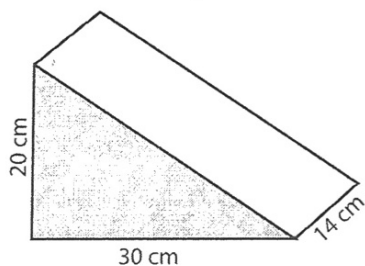
2)



Volume = \_\_\_\_\_

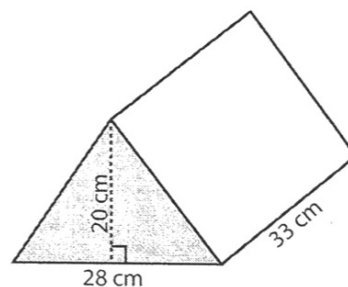
Volume = \_\_\_\_\_

4)



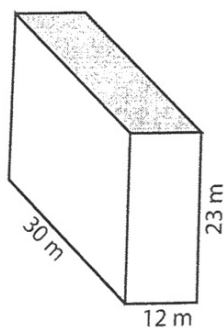
Volume = \_\_\_\_\_

6)



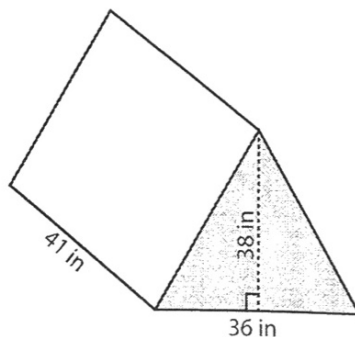
Volume = \_\_\_\_\_

7)



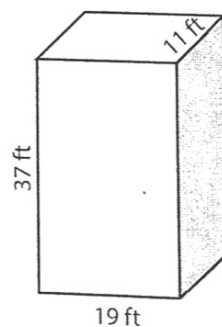
Volume = \_\_\_\_\_

8)



Volume = \_\_\_\_\_

9)



Volume = \_\_\_\_\_